

Addition Facts Through 10

Lesson 2-1

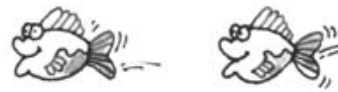
Write how many in all.

1




1 fish

Put in
2 more.



3
in all

2



3 fish

Put in
1 more.



in all

3




2 fish

Put in
2 more.



in all

4



4 fish

Put in
1 more.



in all

5




2 fish

Put in
3 more.




in all



2 and 1 more is 3.


Write the numbers.

1




___ and ___ more is ___.

2




___ and ___ more is ___.

3



___ and ___ more is ___.

4



___ and ___ more is ___.