


Name \_\_\_\_\_



$8 - 3 = \underline{5}$

$$\begin{array}{r} 8 \\ -3 \\ \hline 5 \end{array}$$

How many are left?

$\begin{array}{r} 8 \\ -2 \\ \hline \end{array}$

$\begin{array}{r} 8 \\ -4 \\ \hline \end{array}$

$\begin{array}{r} 8 \\ -1 \\ \hline \end{array}$


$\begin{array}{r} 8 \\ -0 \\ \hline \end{array}$

$\begin{array}{r} 8 \\ -6 \\ \hline \end{array}$


$\begin{array}{r} 8 \\ -5 \\ \hline \end{array}$

$\begin{array}{r} 8 \\ -7 \\ \hline \end{array}$

$\begin{array}{r} 8 \\ -8 \\ \hline \end{array}$



$9 - 2 = \underline{7}$



$9 - 5 = \underline{4}$

$\begin{array}{r} 9 \\ -1 \\ \hline \end{array}$

$\begin{array}{r} 9 \\ -4 \\ \hline \end{array}$

$\begin{array}{r} 9 \\ -6 \\ \hline \end{array}$

$\begin{array}{r} 9 \\ -8 \\ \hline \end{array}$

$\begin{array}{r} 9 \\ -0 \\ \hline \end{array}$

$\begin{array}{r} 9 \\ -3 \\ \hline \end{array}$

$\begin{array}{r} 9 \\ -9 \\ \hline \end{array}$

$\begin{array}{r} 9 \\ -7 \\ \hline \end{array}$